


ZADANIE 1
ROZPOZNAJ INTERWAŁY

1	2	3	4	5	6	7	8	9	10
---	---	---	---	---	---	---	---	---	----


ZADANIE 2
ROZPOZNAJ AKORDY

1	2	3	4	5	6	7	8	9	10
---	---	---	---	---	---	---	---	---	----


ZADANIE 3
NAPISZ GAMEŃ D – DUR I ZAZNACZ PÓŁTONY




ZADANIE 4
NAPISZ GAMEŃ ES – DUR I ZAZNACZ PÓŁTONY



ZADANIE 5
NAPISZ GAMEŃ fis – moll W ODMIANIE HARMONICZNEJ

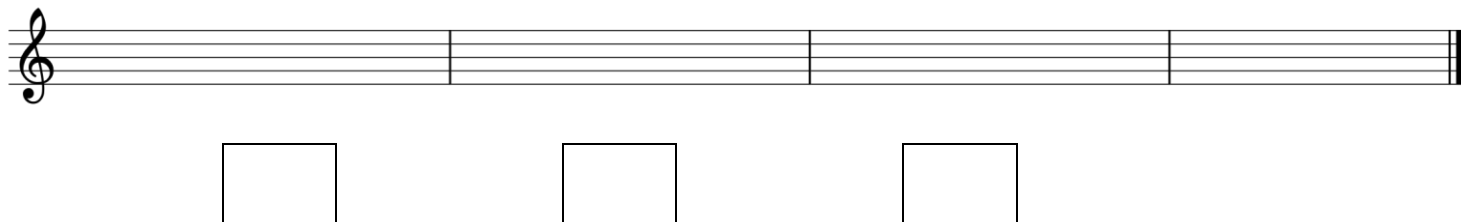


ZADANIE 6
NAPISZ GAMEŃ d – moll W ODMIANIE DORYCKIEJ



ZADANIE 7

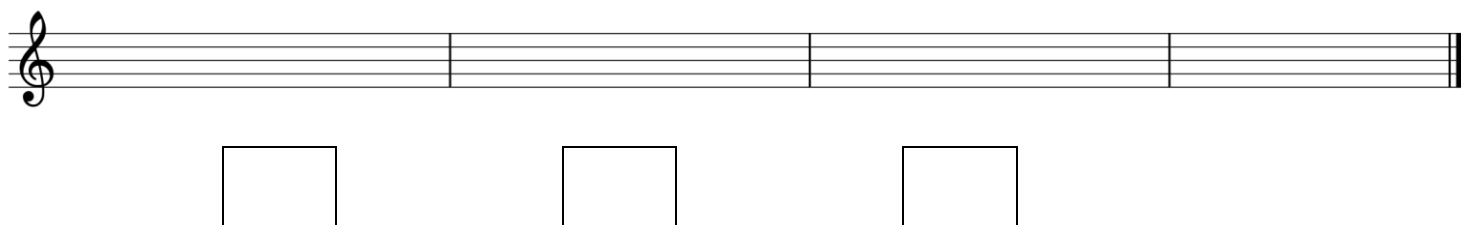
NAPISZ TRIADĘ HARMONICZNĄ W TONACJI **E – DUR** I NAZWIJ TE TRÓJDŹWIĘKI



A musical staff with a treble clef, divided into four measures. Below the staff, there are three empty rectangular boxes, one centered under each of the first three measures, intended for writing the notes of a harmonic triad.

ZADANIE 8

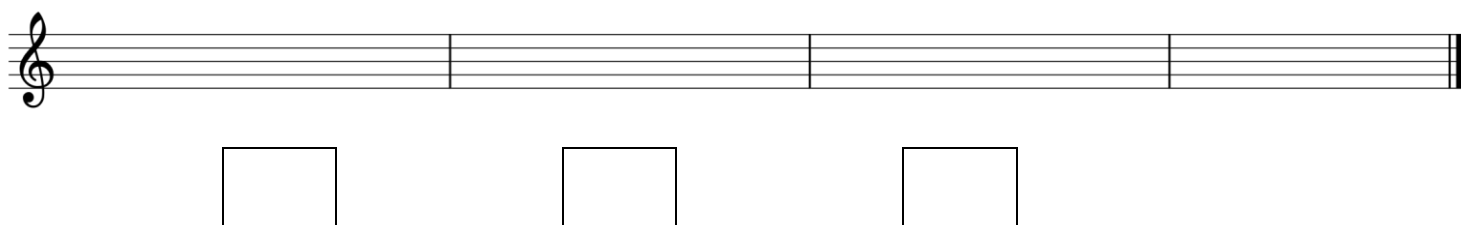
NAPISZ TRIADĘ HARMONICZNĄ W TONACJI **B – DUR** I NAZWIJ TE TRÓJDŹWIĘKI



A musical staff with a treble clef, divided into four measures. Below the staff, there are three empty rectangular boxes, one centered under each of the first three measures, intended for writing the notes of a harmonic triad.

ZADANIE 9

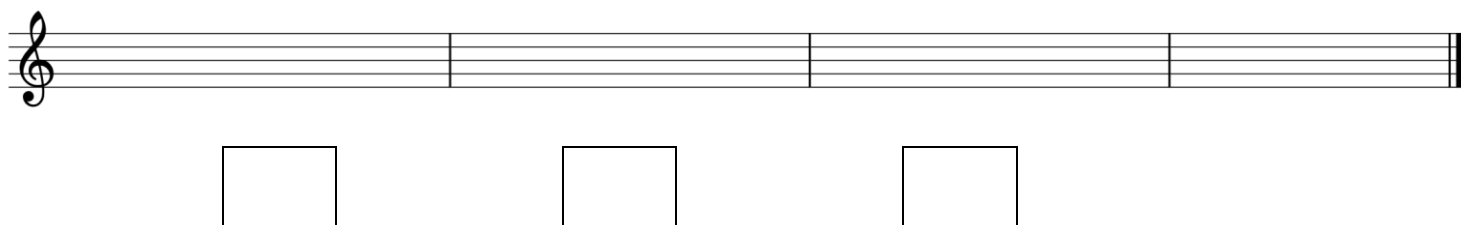
NAPISZ TRIADĘ HARMONICZNĄ W TONACJI **h – moll** I NAZWIJ TE TRÓJDŹWIĘKI



A musical staff with a treble clef, divided into four measures. Below the staff, there are three empty rectangular boxes, one centered under each of the first three measures, intended for writing the notes of a harmonic triad.

ZADANIE 10

NAPISZ TRIADĘ HARMONICZNĄ W TONACJI **cis – moll** I NAZWIJ TE TRÓJDŹWIĘKI



A musical staff with a treble clef, divided into four measures. Below the staff, there are three empty rectangular boxes, one centered under each of the first three measures, intended for writing the notes of a harmonic triad.